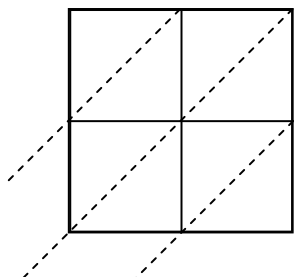


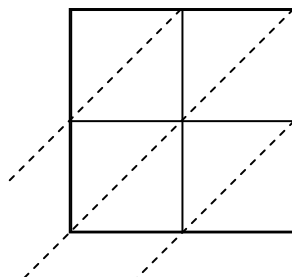


Use lattice multiplication to solve each problem.

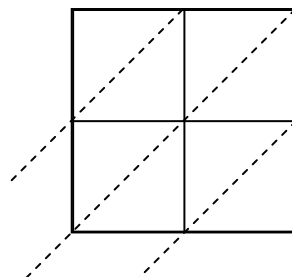
1)  $18 \times 35 =$



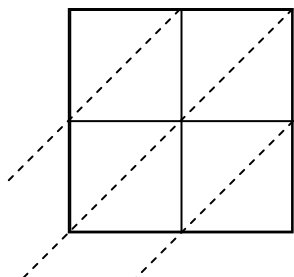
2)  $53 \times 85 =$



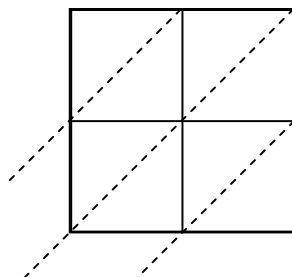
3)  $76 \times 55 =$



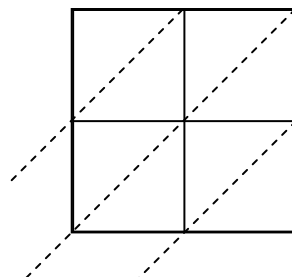
4)  $52 \times 57 =$



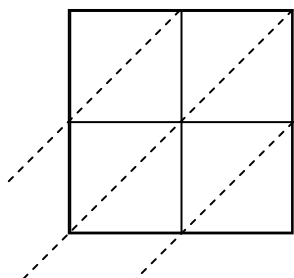
5)  $80 \times 99 =$



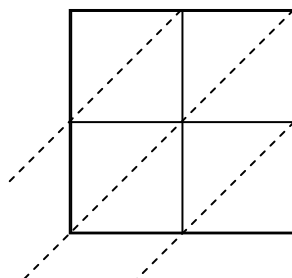
6)  $38 \times 19 =$



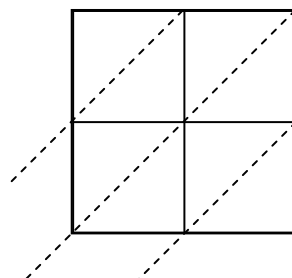
7)  $93 \times 53 =$



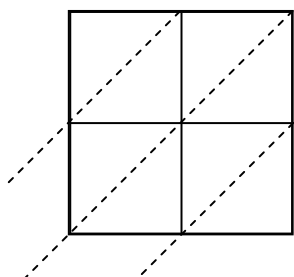
8)  $27 \times 83 =$



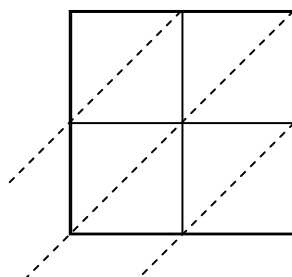
9)  $72 \times 60 =$



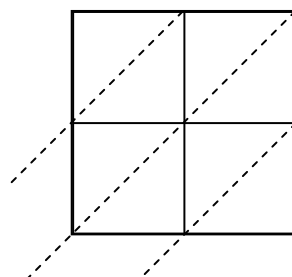
10)  $64 \times 16 =$



11)  $38 \times 21 =$



12)  $43 \times 70 =$



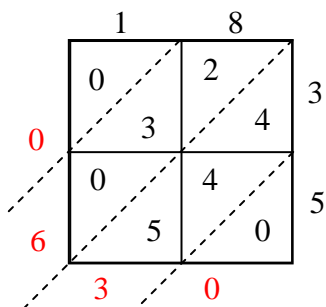
**Answers**

1. \_\_\_\_\_
2. \_\_\_\_\_
3. \_\_\_\_\_
4. \_\_\_\_\_
5. \_\_\_\_\_
6. \_\_\_\_\_
7. \_\_\_\_\_
8. \_\_\_\_\_
9. \_\_\_\_\_
10. \_\_\_\_\_
11. \_\_\_\_\_
12. \_\_\_\_\_

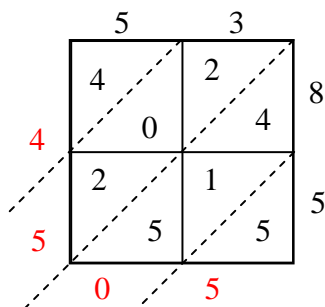


Use lattice multiplication to solve each problem.

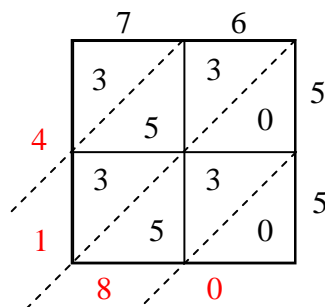
1)  $18 \times 35 =$



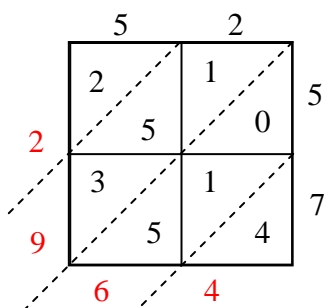
2)  $53 \times 85 =$



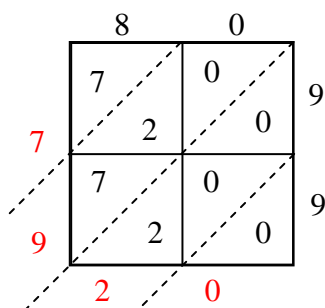
3)  $76 \times 55 =$



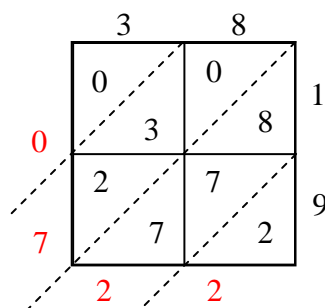
4)  $52 \times 57 =$



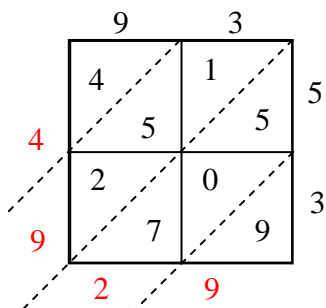
5)  $80 \times 99 =$



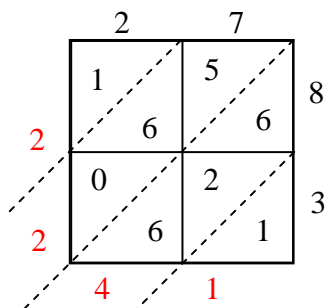
6)  $38 \times 19 =$



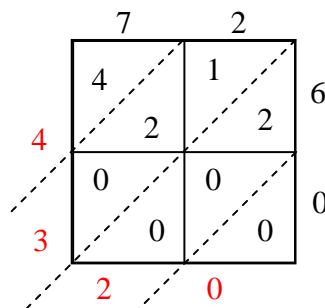
7)  $93 \times 53 =$



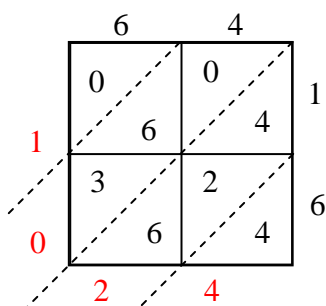
8)  $27 \times 83 =$



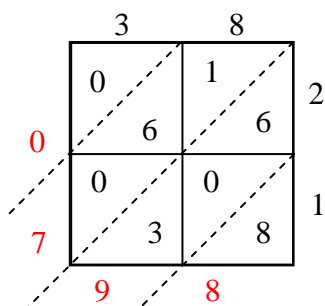
9)  $72 \times 60 =$



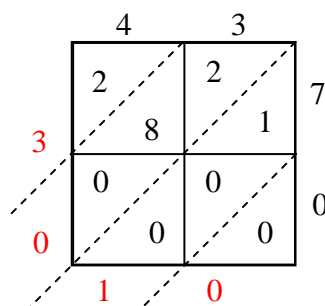
10)  $64 \times 16 =$



11)  $38 \times 21 =$



12)  $43 \times 70 =$



Answers

1. **630**

2. **4,505**

3. **4,180**

4. **2,964**

5. **7,920**

6. **722**

7. **4,929**

8. **2,241**

9. **4,320**

10. **1,024**

11. **798**

12. **3,010**